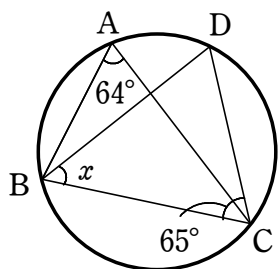


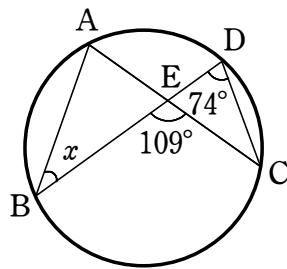
円周角の定理②

1 次の図において、 $\angle x$ の大きさを求めなさい。

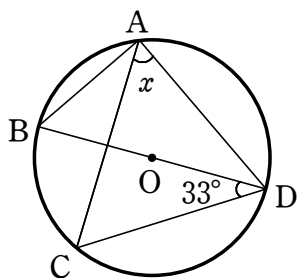
(1)



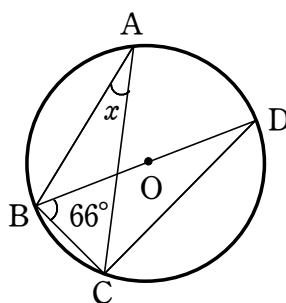
(2)



(3)

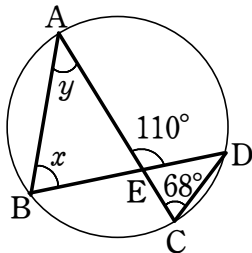


(4)

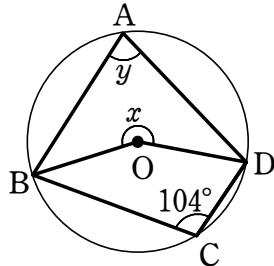


2 次の図において、 $\angle x$, $\angle y$ の大きさを求めなさい。ただし、(5)の AC は円 O の直径である。

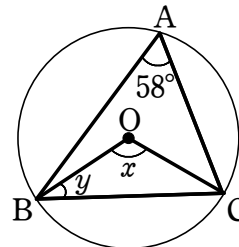
(1)



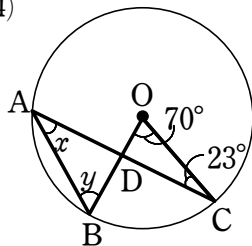
(2)



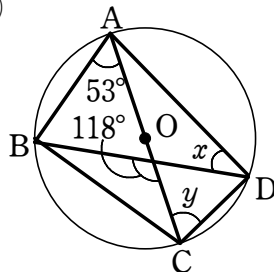
(3)



(4)



(5)



(6)

