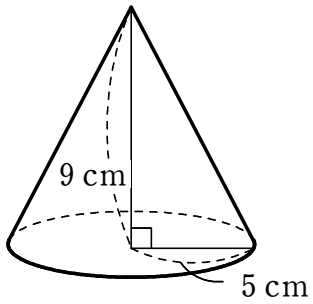


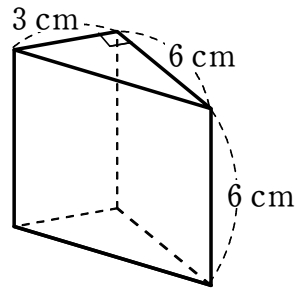
立体の体積

1 次の立体の体積を求めなさい。

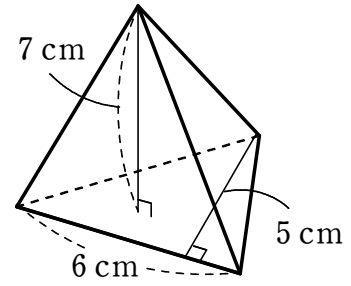
(1) 円錐



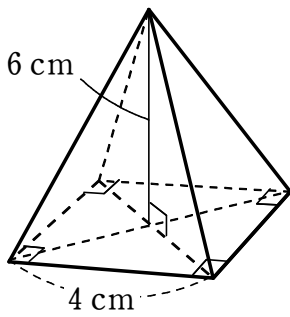
(2) 三角柱



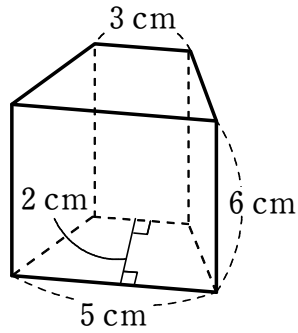
(3) 三角錐



(4) 正四角錐

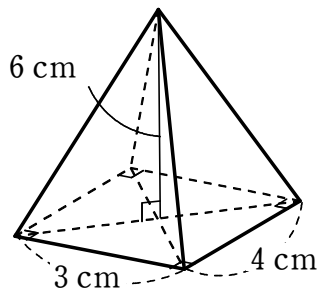


(5) 四角柱



2 次の立体の体積を求めなさい。

(1) 四角錐



(2) 球

