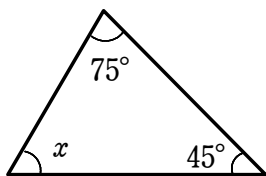


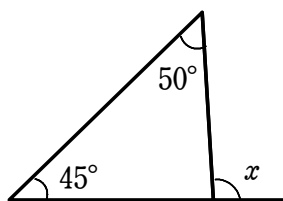
# 図形の性質（三角形の内角と外角）①

1 次の図において、 $\angle x$  の大きさを求めなさい。

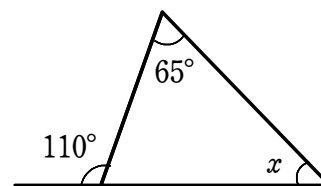
(1)



(2)

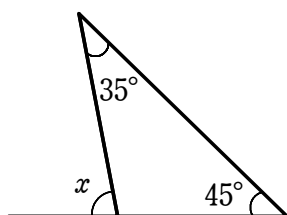


(3)

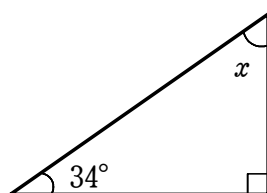


2 次の図において、 $\angle x$  の大きさを求めなさい。

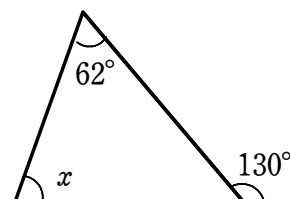
(1)



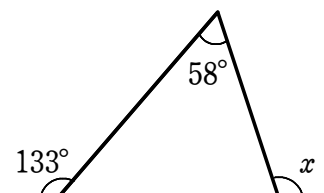
(2)



(3)



(4)



(5)

